

CANDIDATE
NAME

--

CENTRE
NUMBER

--	--	--	--	--

CANDIDATE
NUMBER

--	--	--	--



ADDITIONAL MATHEMATICS

0606/22

Paper 2

February/March 2016

2 hours

Candidates answer on the Question Paper.

Additional Materials: Electronic calculator

READ THESE INSTRUCTIONS FIRST

Write your Centre number, candidate number and name on all the work you hand in.

Write in dark blue or black pen.

You may use an HB pencil for any diagrams or graphs.

Do not use staples, paper clips, glue or correction fluid.

DO **NOT** WRITE IN ANY BARCODES.

Answer **all** the questions.

Give non-exact numerical answers correct to 3 significant figures, or 1 decimal place in the case of angles in degrees, unless a different level of accuracy is specified in the question.

The use of an electronic calculator is expected, where appropriate.

You are reminded of the need for clear presentation in your answers.

At the end of the examination, fasten all your work securely together.

The number of marks is given in brackets [] at the end of each question or part question.

The total number of marks for this paper is 80.

This document consists of **16** printed pages.

Mathematical Formulae**1. ALGEBRA***Quadratic Equation*

For the equation $ax^2 + bx + c = 0$,

$$x = \frac{-b \pm \sqrt{b^2 - 4ac}}{2a}$$

Binomial Theorem

$$(a + b)^n = a^n + \binom{n}{1} a^{n-1} b + \binom{n}{2} a^{n-2} b^2 + \dots + \binom{n}{r} a^{n-r} b^r + \dots + b^n,$$

where n is a positive integer and $\binom{n}{r} = \frac{n!}{(n-r)!r!}$

2. TRIGONOMETRY*Identities*

$$\sin^2 A + \cos^2 A = 1$$

$$\sec^2 A = 1 + \tan^2 A$$

$$\operatorname{cosec}^2 A = 1 + \cot^2 A$$

Formulae for ΔABC

$$\frac{a}{\sin A} = \frac{b}{\sin B} = \frac{c}{\sin C}$$

$$a^2 = b^2 + c^2 - 2bc \cos A$$

$$\Delta = \frac{1}{2} bc \sin A$$

1 Two variables x and y are such that $y = \frac{5}{\sqrt{x-9}}$ for $x > 9$.


(i) Find an expression for $\frac{dy}{dx}$. [2]

(ii) Hence, find the approximate change in y as x increases from 13 to $13 + h$, where h is small. [2]

2 The sets A , B and C are such that

$$\begin{aligned} C &\subset A, \\ B \cap C &= \emptyset, \\ n(A \cap B) &= 2, \\ n(B) &= 12, \\ n(B \cup C) &= 14, \\ n(A \cup B) &= 19. \end{aligned}$$

Complete the Venn diagram to show the sets A , B and C and hence state $n(A \cap B' \cap C')$.



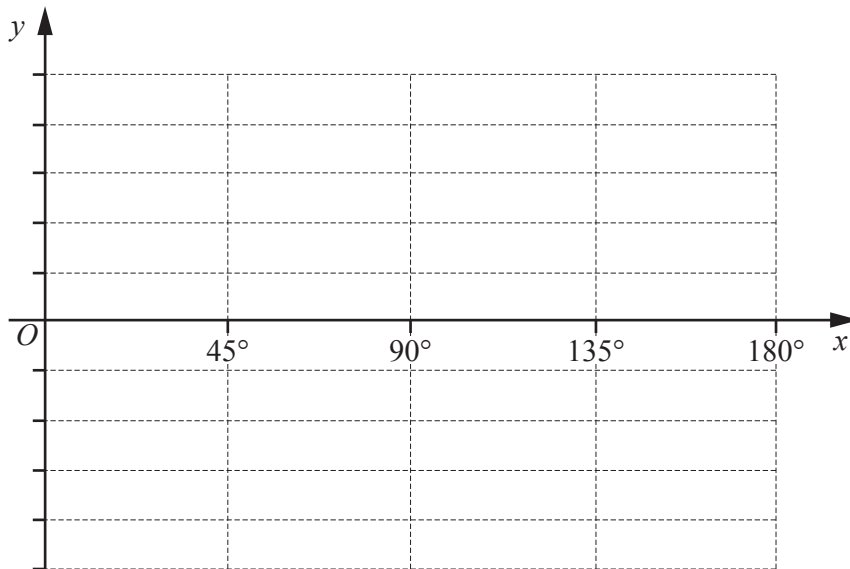
$$n(A \cap B' \cap C') = \dots\dots\dots$$

[4]

- 3 Find the equation of the curve which passes through the point (1, 7) and for which $\frac{dy}{dx} = \frac{9x^4 - 3}{x^2}$. [4]

- 4 (a) $f(x) = a \cos bx + c$ has a period of 60° , an amplitude of 10 and is such that $f(0) = 14$. State the values of a , b and c . [2]

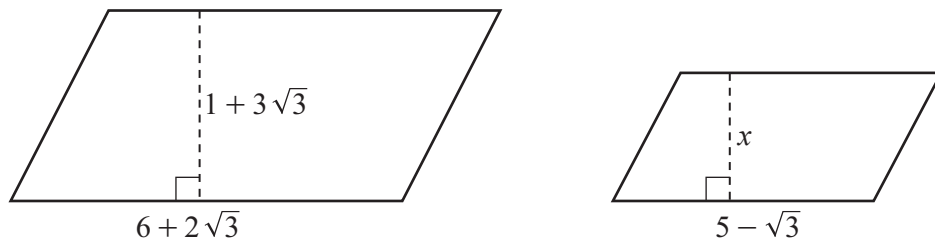
- (b) Sketch the graph of $y = 3 \sin 4x - 2$ for $0^\circ \leq x \leq 180^\circ$ on the axes below. [3]



- 5 (i) Find, in ascending powers of x , the first 3 terms of the expansion of $(3 + kx)^7$, where k is a constant. Give each term in its simplest form. [3]

- (ii) Given that, in the expansion of $(3 + kx)^7$, the coefficient of x^2 is twice the coefficient of x , find the value of k . [2]

6 Do not use a calculator in this question.



The diagram shows two parallelograms that are similar. The base and height, in centimetres, of each parallelogram is shown. Given that x , the height of the smaller parallelogram, is $\frac{p + q\sqrt{3}}{6}$, find the value of each of the integers p and q . [5]

7 (a) Given that $\mathbf{A} = \begin{pmatrix} 4 & 6 & 8 \\ -2 & 0 & 4 \end{pmatrix}$ and $\mathbf{B} = \begin{pmatrix} 6 & 1 & 2 \\ 7 & -2 & 1 \end{pmatrix}$, find $\mathbf{A} - 3\mathbf{B}$. [2]

(b) Given that $\mathbf{C} = \begin{pmatrix} -2 & 0 \\ 4 & 1 \end{pmatrix}$ and $\mathbf{D} = \begin{pmatrix} 4 & 3 \\ -3 & -5 \end{pmatrix}$, find

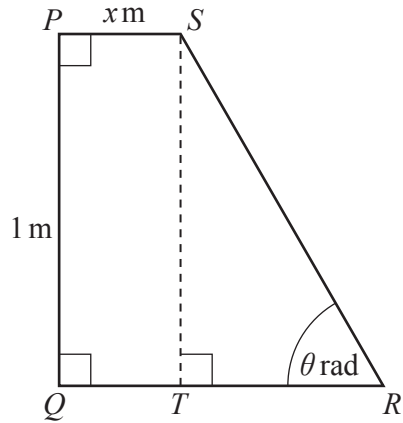
(i) the inverse matrix \mathbf{C}^{-1} , [2]

(ii) the matrix \mathbf{X} such that $\mathbf{XD}^{-1} = \mathbf{C}$. [3]

8 The line $2y = x + 2$ meets the curve $3x^2 + xy - y^2 = 12$ at the points A and B .

(i) Find the coordinates of the points A and B . [5]

(ii) Given that the point C has coordinates $(0, 6)$, show that the triangle ABC is right-angled. [2]



$PQRS$ is a quadrilateral with PS parallel to QR . The perimeter of $PQRS$ is 3 m . The length of PQ is 1 m and the length of PS is $x\text{ m}$. The point T is on QR such that ST is parallel to PQ . Angle SRT is θ radians.

(i) Find an expression for x in terms of θ . [3]

(ii) Show that the area, $A\text{ m}^2$, of $PQRS$ is given by $A = 1 - \frac{\operatorname{cosec} \theta}{2}$. [2]

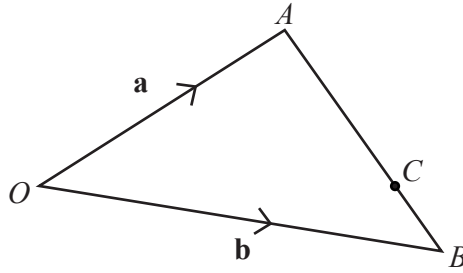
(iii) Hence find the exact value of θ when $A = \left(1 - \frac{\sqrt{3}}{3}\right)\text{ m}^2$. [2]

10 (a) The vectors \mathbf{p} and \mathbf{q} are such that $\mathbf{p} = 11\mathbf{i} - 24\mathbf{j}$ and $\mathbf{q} = 2\mathbf{i} + \alpha\mathbf{j}$.

(i) Find the value of each of the constants α and β such that $\mathbf{p} + 2\mathbf{q} = (\alpha + \beta)\mathbf{i} - 20\mathbf{j}$. [3]

(ii) Using the values of α and β found in part (i), find the unit vector in the direction $\mathbf{p} + 2\mathbf{q}$. [2]

(b)



The points A and B have position vectors \mathbf{a} and \mathbf{b} with respect to an origin O . The point C lies on AB and is such that $AB : AC$ is $1 : \lambda$. Find an expression for \overrightarrow{OC} in terms of \mathbf{a} , \mathbf{b} and λ . [3]

(c) The points S and T have position vectors \mathbf{s} and \mathbf{t} with respect to an origin O . The points O , S and T do not lie in a straight line. Given that the vector $2\mathbf{s} + \mu\mathbf{t}$ is parallel to the vector $(\mu + 3)\mathbf{s} + 9\mathbf{t}$, where μ is a positive constant, find the value of μ . [3]

11 A curve has equation $y = \frac{x}{x^2 + 1}$.

(i) Find the coordinates of the stationary points of the curve.

[5]

- (ii) Show that $\frac{d^2y}{dx^2} = \frac{px^3 + qx}{(x^2 + 1)^3}$, where p and q are integers to be found, and determine the nature of the stationary points of the curve. [5]

Question 12 is printed on the next page.

- 12 A particle P is projected from the origin O so that it moves in a straight line. At time t seconds after projection, the velocity of the particle, $v \text{ ms}^{-1}$, is given by

$$v = 9t^2 - 63t + 90 .$$

- (i) Show that P first comes to instantaneous rest when $t = 2$. [2]
- (ii) Find the acceleration of P when $t = 3.5$. [2]
- (iii) Find an expression for the displacement of P from O at time t seconds. [3]
- (iv) Find the distance travelled by P
- (a) in the first 2 seconds, [2]
- (b) in the first 3 seconds. [2]

Permission to reproduce items where third-party owned material protected by copyright is included has been sought and cleared where possible. Every reasonable effort has been made by the publisher (UCLES) to trace copyright holders, but if any items requiring clearance have unwittingly been included, the publisher will be pleased to make amends at the earliest possible opportunity.

To avoid the issue of disclosure of answer-related information to candidates, all copyright acknowledgements are reproduced online in the Cambridge International Examinations Copyright Acknowledgements Booklet. This is produced for each series of examinations and is freely available to download at www.cie.org.uk after the live examination series.

Cambridge International Examinations is part of the Cambridge Assessment Group. Cambridge Assessment is the brand name of University of Cambridge Local Examinations Syndicate (UCLES), which is itself a department of the University of Cambridge.